


Q1) Rotate the given figures in clockwise direction with one quarter turn, half-turn, three quarter turn and full turn.

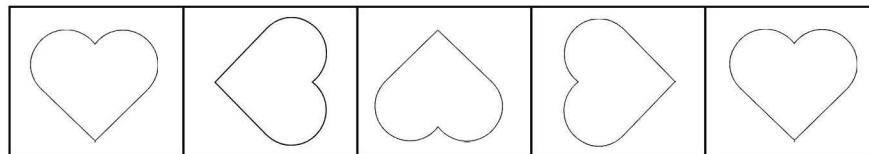
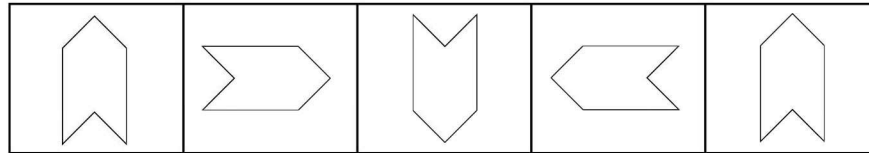
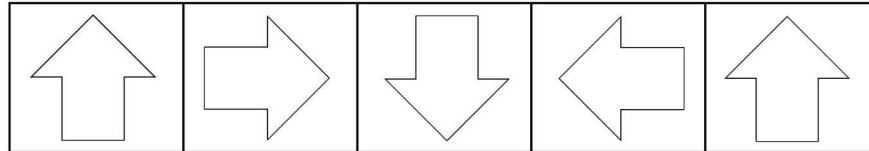



Q2) Rotate the given figures in anti-clockwise direction with one quarter turn, half-turn, three quarter turn and full turn.



ROTATION - ANSWERS

Q1) Rotate the given figures in clockwise direction with one quarter turn, half-turn, three quarter turn and full turn.



Q2) Rotate the given figures in anti-clockwise direction with one quarter turn, half-turn, three quarter turn and full turn.

