



- Q1)- What time is shown on the clock if the hour hand is on 3 and the minute hand is on 12?
- Q2)- Draw the hands of the clock to show 10:15.
- Q3)- If the minute hand is on 6 and the hour hand is on 7, what is the time?
- Q4)- What time is it when the clock shows 12:30?
- Q5)- The clock shows the hour hand on 9 and the minute hand on 3. Write the time.
- Q6)- Write the time when the clock shows the hour hand between 2 and 3 and the minute hand on 12.
- Q7)- Is the time 4:15 in the morning or evening if the sun is rising?
- Q8)- Identify the time when the hour hand is on 5 and the minute hand is on 9.
- Q9)- Write "a.m." or "p.m." for 8:00 when you go to school.
- Q10)- What time does the clock show when the hour hand is on 6 and the minute hand is on 12?


Q11)- What time it is?




It's half past five.




It's five minutes to ten.




It's quarter past eleven.

Ans-1) 3:00 - 3'o clock

Ans-2)



Ans-3) 7:30 - Half past seven

Ans-4) 12:30 - Half past twelve

Ans-5) 9:15- Quarter past nine

Ans-6) 2:00 - 2'o clock

Ans-7) Morning (a.m.)

Ans-8) 5:45 - Quarter to six

Ans-9) a.m.

Ans-10) 6:00 - 6 o'clock

Ans-11)



5:30

It's half past five.



9:55

It's five minutes to ten.



11:15

It's quarter past eleven.