



$\frac{1}{4}$

=



$\frac{4}{16}$




$\frac{1}{2}$

=




$\frac{1}{2}$



$\frac{3}{4}$

=



$\frac{12}{16}$

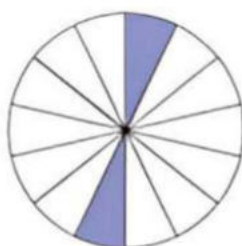


$\frac{3}{5}$

=

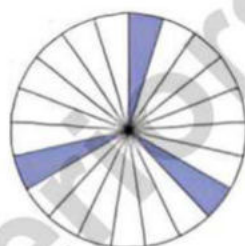


$\frac{6}{10}$

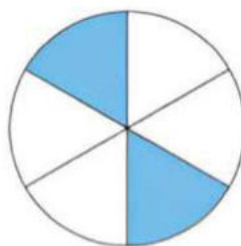


$\frac{1}{2}$

=

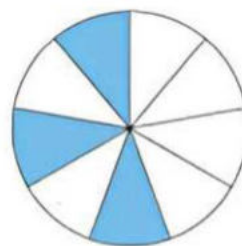


$\frac{8}{16}$




$\frac{1}{2}$

=

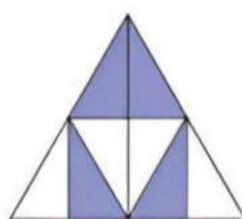


$\frac{1}{2}$

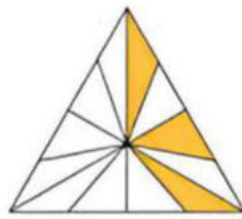


$\frac{3}{4}$

=

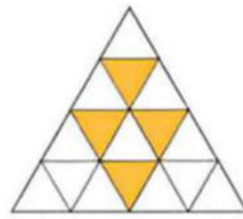


$\frac{3}{4}$



$\frac{2}{3}$


=



$\frac{2}{3}$


EQUIVALENT-FRACTIONS

Answers




$$\frac{1}{4}$$

=



$$\frac{4}{16}$$




$$\frac{6}{12}$$

=




$$\frac{3}{6}$$



$$\frac{7}{8}$$

=



$$\frac{14}{16}$$

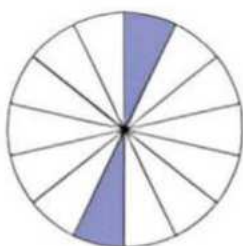


$$\frac{4}{5}$$

=

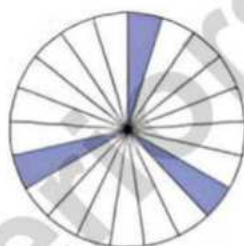


$$\frac{8}{10}$$

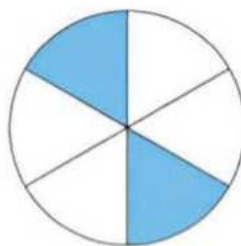


$$\frac{2}{14}$$

=

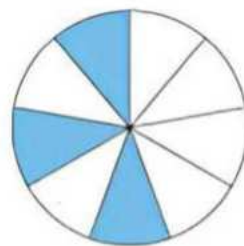


$$\frac{3}{21}$$

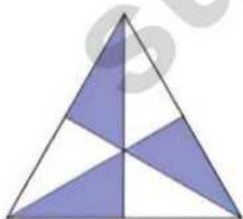


$$\frac{2}{6}$$

=

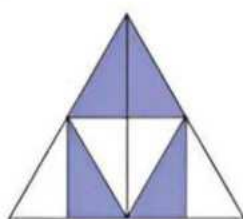


$$\frac{3}{9}$$

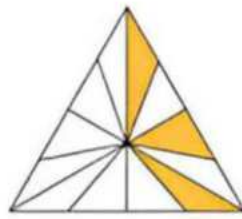


$$\frac{3}{6}$$

=

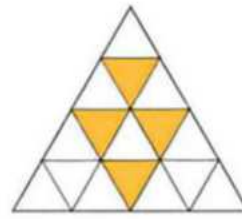


$$\frac{4}{8}$$



$$\frac{3}{12}$$

=



$$\frac{4}{16}$$